
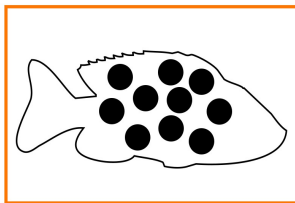


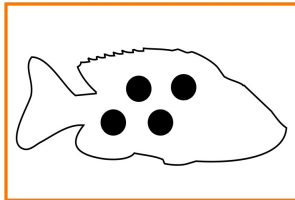
**CONTA I PUNTINI NERI E
COLLEGA IL PESCE
AL NUMERO
CORRISPONDENTE**



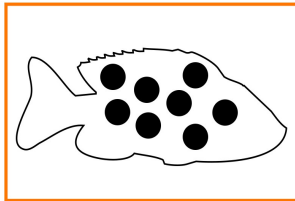
10



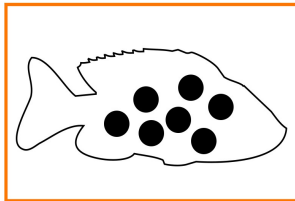
8



4



6



7

$$\begin{array}{|c|} \hline \text{Fish} \\ \hline \end{array} + \begin{array}{|c|} \hline \text{Fish} \\ \hline \end{array} = \square$$

$$\begin{array}{|c|} \hline \text{Onions} \\ \hline \end{array} + \begin{array}{|c|} \hline \text{Onions} \\ \hline \end{array} = \square$$

$$\begin{array}{|c|} \hline \text{Mobile Phones} \\ \hline \end{array} + \begin{array}{|c|} \hline \text{Mobile Phones} \\ \hline \end{array} = \square$$

$$\begin{array}{|c|} \hline \text{Forks} \\ \hline \end{array} + \begin{array}{|c|} \hline \text{Forks} \\ \hline \end{array} = \square$$

**PROVIAMO A FARE LE
PRIME SOMME**